



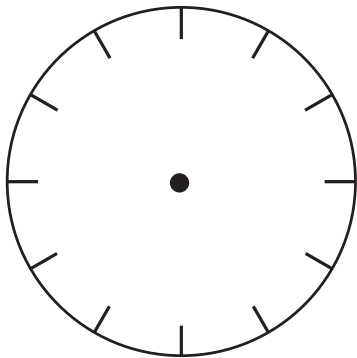
Adding Fractions

1 Show the fractions on the strips. Then add them and report the sum.

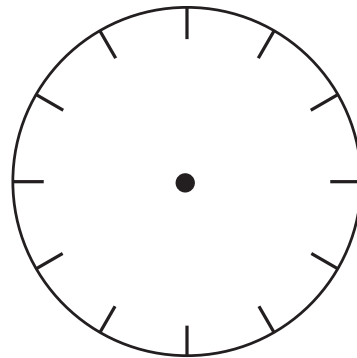
	First	Second	Add Them	Sum
a	$\frac{3}{4}$ 	$\frac{3}{4}$ 		
b	$\frac{3}{8}$ 	$\frac{1}{2}$ 		
c	$\frac{5}{8}$ 	$\frac{3}{4}$ 		
d	$\frac{1}{2}$ 	$\frac{7}{8}$ 		

2 Model each problem on a clock to add the fractions. Remember to label your work.

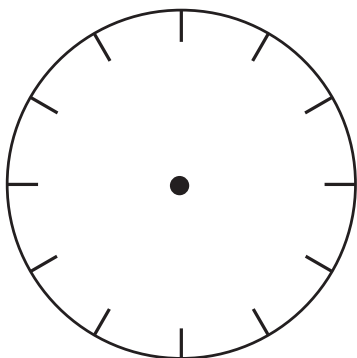
a $\frac{1}{2} + \frac{1}{6} =$



b $\frac{2}{3} + \frac{1}{6} =$



c $\frac{1}{3} + \frac{2}{6} =$



d $\frac{2}{3} + \frac{5}{6} =$

