

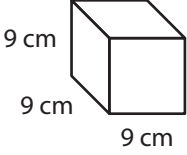
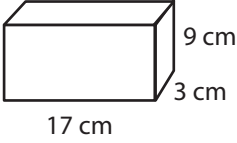
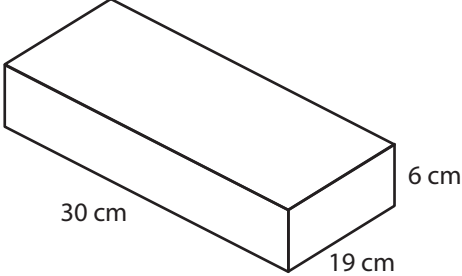
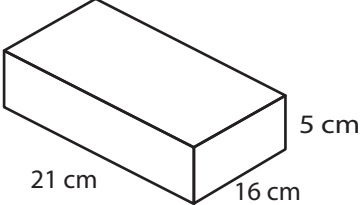
NAME _____

DATE _____



Pet Snacks

- 1** The pet store sells boxes of pet food and snacks in four sizes. Write and solve an equation to find the volume of each box. Label your answers with the correct units.

<p>a</p>  <p>Equation</p> <p>Volume</p>	<p>b</p>  <p>Equation</p> <p>Volume</p>
<p>c</p>  <p>Equation</p> <p>Volume</p>	<p>d</p>  <p>Equation</p> <p>Volume</p>

- 2** Use the information above to solve these problems.
- a** How much more is the volume of box c than the volume of box a? Show your work.
- b** What is the combined volume of boxes b and d? Show your work.
- c** Jenny bought 3 boxes of Yummy Dog Snacks, the same size as shown in d above. What is the total volume of the 3 boxes put together? Show your work.